

Thakur Educational Trust's (Regd.)  
**THAKUR VIDYA MANDIR HIGH SCHOOL & JUNIOR COLLEGE**

II Terminal Examination 2015-16

Subject : Mathematics

NAME \_\_\_\_\_ Std: II DIV. \_\_\_\_\_ Roll NO.: \_\_\_\_\_

DATE - 21 / 01 / 2016

MARKS: 60

Timing : 2 hrs 45 mins

**Q I A] Fill in the blanks :**

**(6)**

1. Today is Thursday, yesterday was \_\_\_\_\_.
2. The cardinal number of six is \_\_\_\_\_.
3. I will get \_\_\_\_\_ coins of one rupee in exchange of 1 ten rupee note.
4. Five \_\_\_\_\_ are thirty five.
5. The Gregorian year has \_\_\_\_\_ months.
6. Of 16 and 11,  is bigger than .

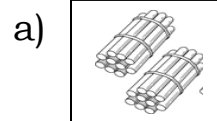
**B] Match the column :**

**(6)**

**Column A**

**Column B**

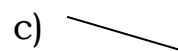
1. Indian solar year



2. 9<sup>th</sup>

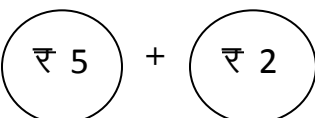
b) ₹ 7

3. 20



4. ₹ 45

d) ninth

5. 

e) Chaitra

6. Slanting line

f) ₹ 20 + ₹ 20 + ₹ 5

Ans : 1 \_\_\_\_\_ 2. \_\_\_\_\_ 3. \_\_\_\_\_ 4. \_\_\_\_\_ 5. \_\_\_\_\_ 6. \_\_\_\_\_

**QII A ] Write in numerals :**

**(2)**

1. Four hundred and sixty two - \_\_\_\_\_
2. Six hundred and ten - \_\_\_\_\_

**B] Write in words:**

**(2)**

- a) 799 - \_\_\_\_\_
- b) 554 - \_\_\_\_\_

**QIII A] Fill in the boxes :****(6)**

a)  $7 \times 8 = \square$

b)  $3 \times \square = 15$

c)  $9 \times \square = 9$

d)  $4 \times 4 = \square$

e)  $6 \times 3 = \square$

f)  $2 \times \square = 20$

**B] Tick ( $\surd$ ) right or wrong (x) for the following statement :****(3)**1) The ordinal number name of 10<sup>th</sup> is Tenth. 2)  $45 - 9 = 40$  3) The number 5 is 2 less than 7 **QIV Do as directed :****(19)**

1) Draw the correct number of strings and single beads :

Number	Strings of 10 beads	Single beads
27		

2) Write the numbers in order :

48 to 51  $\longrightarrow$     

3) From the given pairs write the bigger and smaller number :

Number	Smaller Number	Bigger Number
22, 29		

4) Write the following numbers in ascending and descending order :


	Ascending Order	Descending order
27, 81, 49, 11		
33, 36, 32, 38		

5) Find the next three numbers :

2	5			
---	---	--	--	--

4	8			
---	---	--	--	--

6) a) Look at the picture and make the correct group and write the correct number in each empty box :



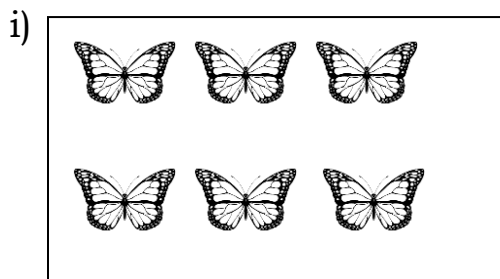
Total number of marbles

Make a group of 3 marbles.

How many groups are formed ?

How many marbles are left over ?

b) Write the correct number in each box :



How many butterflies in a row ?

Number of rows = 2.

The total number of butterflies are

$$\boxed{\phantom{00}} + \boxed{\phantom{00}} = \boxed{\phantom{00}}$$

ii)

26 means  T  U

untie  ten

We get  units

Now we have  tens  units.

iii) Take a small step and big step in correct direction and solve :

$$27 - 10 = \boxed{\phantom{00}}$$


---

**QV A] Add the following :**

**(4)**

T	U
3	5
+ 2	7

T	U
7	8
+ 1	8

**C] Subtract the following :**

**(4)**

T	U
2	7
- 1	3

T	U
6	9
- 4	8

T	U
9	4
- 3	9

**QVI A] Word problems**

**(8)**

- 1) Ram solved 34 pages of his Maths textbook in the morning and 18 pages in the evening. How many pages did he solved altogether ?

Tens	Units
□	

---

---

---

Ans : \_\_\_\_\_

- 2) Maya brought 46 plants from the nursery and planted 18 plants in the garden. How many plants are still to be planted ?

Tens	Units
□	

---

---

---

---

Ans : \_\_\_\_\_

**All the best**

**QIA] Fill in the blanks :**

**(6)**

1. The island was not a real island but was a huge \_\_\_\_\_.
2. The belly \_\_\_\_\_ the food.
3. When the school is over for the day, the children go off to play and \_\_\_\_\_.
4. The four musicians never went to \_\_\_\_\_ town.
5. The body of a robot is made of \_\_\_\_\_.
6. The \_\_\_\_\_ is the largest of all animals in the sea.

**B] Match the column :**

**(5)**

- | A           | B                                 |
|-------------|-----------------------------------|
| 1. generous | a) path                           |
| 2. wader    | b) watching some thing very badly |
| 3. horses   | c) very kind                      |
| 4. street   | d) trot                           |
| 5. eager    | e) walk around aimlessly          |
1. \_\_\_\_\_ 2. \_\_\_\_\_ 3. \_\_\_\_\_ 4. \_\_\_\_\_ 5. \_\_\_\_\_

**C] State whether the following statements are true or false:**

**(4)**

1. The king put Sindbad in prison. \_\_\_\_\_
2. The girl thought she would become a hermit. \_\_\_\_\_
3. The frogs hated the rainy season. \_\_\_\_\_
4. One of the merchants was greedy. \_\_\_\_\_
5. Robots are living things. \_\_\_\_\_

**QII. A] Complete the following lines :**

**(2)**

1. Our teeth help us to bite, \_\_\_\_\_  
\_\_\_\_\_

**B] Who said to whom :**

**(2)**

1. " Thank you, little friend " .  
\_\_\_\_\_

2. " My wife wants to be a Queen " .  
\_\_\_\_\_

**C] Frame sentences :**

**(2)**

1. friend - \_\_\_\_\_

---

2. Scared - \_\_\_\_\_

---

**D] Complete the lines of the poem :** (2)

Mix a pancake,  
\_\_\_\_\_,  
Pop it in the pan;  
Fry a pancake,  
\_\_\_\_\_,  
Catch it if you can.

**QIII. A] Do as directed :** (10)

- Find the smaller word in  
mother - \_\_\_\_\_
- Write the rhyming word for the following :  
sow - \_\_\_\_\_
- Give opposite for the following:  
tall x \_\_\_\_\_
- Give one word for :  
One who writes - \_\_\_\_\_
- Write the plural of 'game' - \_\_\_\_\_
- Write in alphabetical order:  

T	P	S	U	=				
---	---	---	---	---	--	--	--	--
- Add ' ed ' to the word 'pop' - \_\_\_\_\_
- The female name of 'drake' is - \_\_\_\_\_
- Write the word correctly :  
beter - \_\_\_\_\_

**B] Answer the following questions:** (10)

1. Where did Malhar live ?  
Ans: \_\_\_\_\_

---

2. What happens if the baby teeth or milk teeth falls off ?  
Ans: \_\_\_\_\_

---

3. What happens when people don't get enough sleep ?

Ans: \_\_\_\_\_

---

4. Why did Mr. Cross write a letter to the Mayor ?

Ans: \_\_\_\_\_

---

5. Why Ashwin wanted to become a mango tree ?

Ans: \_\_\_\_\_

---

### Grammar

**Q1. Do as directed :**

**(17)**

1. Write in alphabetical order :

Chalk, paper, scale, pencil

---

2. Cross the proper Noun :

Mary had a little lamb.

3. Circle the Common Noun:

Neha reads a book every day.

4. Write the correct vowel :



( \_\_\_ c e - cre \_\_\_ m )

5. Write the consonant :

tap      \_\_\_ ap      \_\_\_ ap

6. The plural of ' watch' is \_\_\_\_\_

7. The masculine of 'grand mother' is \_\_\_\_\_

8. Rewrite the sentence using capital letters, full stop or question marks where necessary.

rohan, anita and i like to build sand castles

---

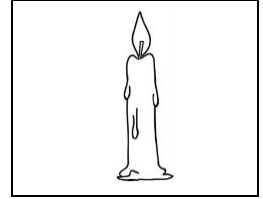
9. Fill in the blanks:

a) \_\_\_\_\_ tiger roars inside the cage. ( An, The)

b) \_\_\_\_\_ apple a day keeps the doctor away. ( An, A)

10. I am made of wax

I give you light  
The longer I stand  
The shorter I grow  
WHO AM I ? \_\_\_\_\_



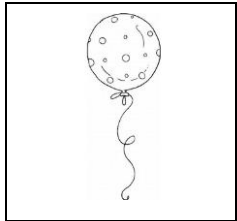
11. Young one of lion and lioness is \_\_\_\_\_.

12. Tick the correct punctuation :

- a) Do you like to climb the rock ( • / ? )
- b) Aliya loves to dance ( • / ? )

13. I look smart in my uniform and cap  
I fly aeroplanes. I am a \_\_\_\_\_.

14. Name the picture :




\_\_\_\_\_

15. Make a new word by adding one letter :



+ nail = \_\_\_\_\_



**QII. Write the composition on any one of the following :**

**(3)**

Our National Flag or The Farmer.

---

---

---

---

---

---

---

---

---

---

---

**All the best**